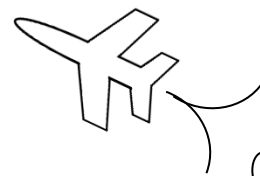




# MAth on the Fly!

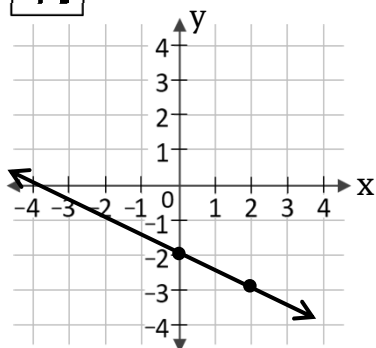


NAME: \_\_\_\_\_ DATE: \_\_\_\_\_

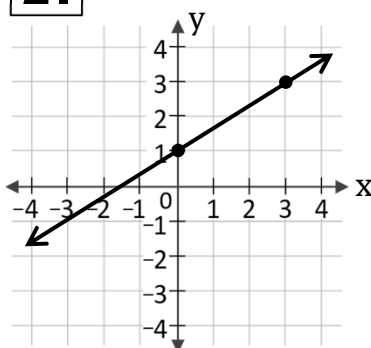
## Finding Slopes of Lines From a Graph

Find the slope of each line.

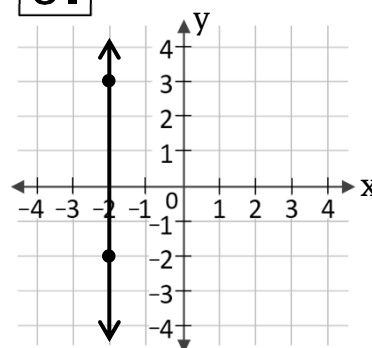
1.



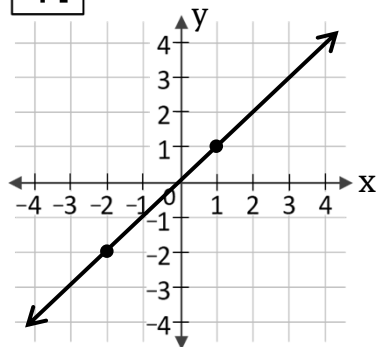
2.



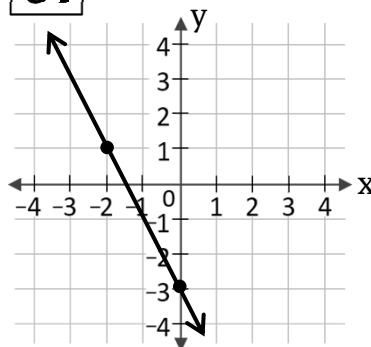
3.



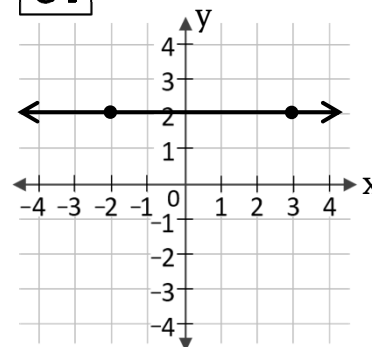
4.



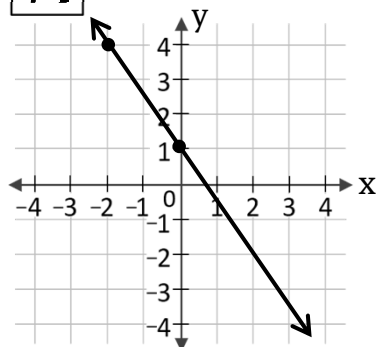
5.



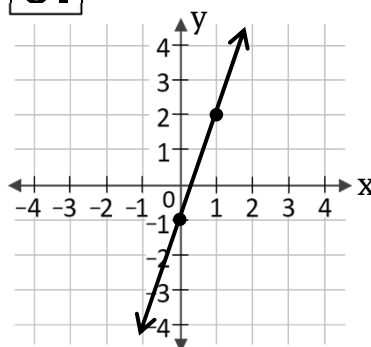
6.



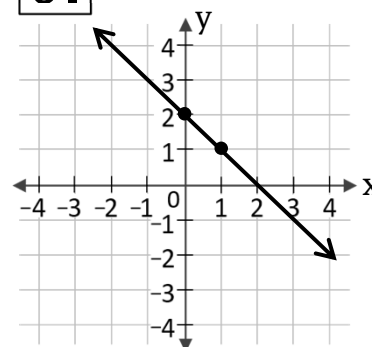
7.



8.



9.



## SOLUTIONS

1.  $m = -\frac{1}{2}$

2.  $m = \frac{2}{3}$

3.  $m = \text{undefined}$

4.  $m = 1$

5.  $m = -2$

6.  $m = 0$

7.  $m = -\frac{3}{2}$

8.  $m = 3$

9.  $m = -1$